

Time: 02 Hrs.

MM-100

Instructions: -

1. All questions are compulsory.
2. All questions must be answered in the question booklet itself in the space provided for this purpose.
3. All sub-questions under the main question carry equal marks.
4. Rough work, if required, may be done on the last few pages of this question booklet, provided for the purpose.
5. The candidate should not write their names, roll number or any other mark of identification anywhere on the question cum answer booklet (except for the space provided on the top sheet) Violation of this rule will lead to cancellation of the candidature.

PART-A (English)

30 Marks

1.	Fill in the blanks with correct articles: (1x5 = 05 Marks)
a)	_____ dog is a faithful animal.
b)	My father gave me ____ one rupee note.
c)	He is _____ honest man.
d)	I bought _____ dozen mangoes.
e)	_____ Malsi deer park is in Dehradun.

2.	Fill in the blanks with suitable pronouns: (1x5 = 05 Marks)
a)	_____ has lost her purse.
b)	_____ stole your purse?
c)	I _____ will lift the bundle.
d)	Each of the boy has _____ own book.
e)	_____ are our clothes.
3.	Write down the name of type of noun highlighted by bold capital words in following sentences: (05 Marks)
a)	My ring is made of GOLD . Ans: -
b)	Our TEAM won the match. Ans: -
c)	The GITA is a sacred book. Ans: -
d)	My UMBRELLA is very costly. Ans: -
e)	POVERTY is the greatest curse.


	Ans: -
4.	Rewrite the sentences as directed (1x5 = 05 Marks)
a)	She is unfit for this job. (Change into affirmative sentence) _____.
b)	He is a doctor. (Change into interrogative sentence) _____
c)	Peter is _____ than her sister. (Fill in the blank with comparative form of 'old')
d)	The princess is a young girl. (Change the gender of nouns in the sentence) _____.
e)	Delhi _____ a crowded city. (Fill in the blank with suitable verb)

5.	Write down the probable answers to following questions: (1 x5 = 05 Marks)
a)	Who were you talking to? _____
b)	What time do you go to school?

	<hr/>
c)	Did you go for a walk yesterday? <hr/>
d)	Do you like to play? <hr/>
e)	Where are you going? <hr/>

6. Describe the picture below in about ten sentences: (05 Marks)

My Bedroom




30 Marks

Q. No.	Question	Space for Answer
1.	Find the answer of the followings (1x5 = 05 Marks)	
a)	How many hundreds are there in a thousand?	_____
b)	Write 'Eight Thousand Ninety-Nine' in standard numeral form?	_____

c)	Find out the difference of the place values of two 8's in 3688?	_____
d)	Write down the greatest 4-digit number using following digits. 1,6,3,5	_____
e)	Compare the numbers. Write > or < 8737 _____ 8773	_____

2.	Find the missing numbers: (5X2 =10 Marks)	
a)	$ \begin{array}{r} 7 \quad _ \quad _ \\ + \quad 2 \quad 2 \quad 1 \\ \hline _ \quad 4 \quad 0 \\ \hline \end{array} $	
b)	$ \begin{array}{r} 3 \quad 7 \quad 2 \\ - \quad _ \quad 5 \quad _ \\ \hline 2 \quad _ \quad 7 \\ \hline \end{array} $	
c)	$ \begin{array}{r} _ \quad 8 \quad 6 \\ - \quad 3 \quad 4 \quad _ \\ \hline 6 \quad _ \quad 9 \\ \hline \end{array} $	

d)	$ \begin{array}{r} 2 \quad _ \quad 5 \quad _ \\ + \quad _ \quad 1 \quad _ \quad 8 \\ \hline 7 \quad 4 \quad 8 \quad 5 \end{array} $	
e)	 <p>The time shown by clock in the picture is _____</p>	
3.	Answer the following (6X2 = 12 Marks)	
a)	A spool has 25 meters ribbon on it. What is the length of the ribbon in centimeters?	
b)	There are 15 coaches on the train and each coach can seat 68 persons. How many persons could have seats in the train?	
c)	A shop had 2,873 bars of chocolate. 1,246 bars were sold. Estimate the number of chocolate bars that were left in shop?	
d)	Suraj earned Rs.8,760 a month. He spent Rs.5,936. How much money did he save in that month?	
e)	Ravi has 46 ten-rupee notes. How	

	much money does he have?	
f)	Pintu wants to pack 875 marbles equally in 07 bags. How many marbles are there in each bag?	

4.	Find out the answers: 03 Marks	
a)	01 cm = ____ millimeters	
b)	01 Kilometer = _____ meters.	
c)	05 hour = _____ minutes	

Part-C (Social Science)**20 Marks**

1.	Fill in the blanks with suitable option: (1 x5 = 05 Marks)
a)	_____ is not a planet of our solar system. (Jupiter, Uranus, Pluto, Mars)
b)	A huge landmass is called a _____. (Continent, Ocean, Sea, Island)
c)	The process of changing of water into water vapors is known as _____. (Evaporation, Condensation, Precipitation, Collection)

d)	<p>_____ are common means of transport in deserts.</p> <p>(Jeeps, Camels, Horses, Elephants)</p>	
e)	<p>Emails can be sent to all over the world through _____.</p> <p>(Ships, airplanes, post office, Internet)</p>	
2.	Write TRUE or FALSE (1 x5 = 05 Marks)	Space for Answer
a)	On children's day we celebrate the birthday of Subhash Chander Bose.	
b)	A pulley is used to draw water from a well.	
c)	Year 2024 is a Leap year	
d)	People eating eggs, meat and fish are called vegetarians.	
e)	COVID 19 is caused by a bacteria	

3. Write down the name of each instrument
(0.5 x 10 = 05 Marks)
(The Picture is given on the next page)



1.

2.

3.

4.

5.

6.

7.

8.

9.

10

4. Write a paragraph in 60-75 words on any one of the following topics: - (05 Marks)




'Importance of sports in our life'



Or 'A Journey by Train'

This image shows a single sheet of white paper with horizontal blue or grey ruling lines. The lines are evenly spaced and run across the width of the page. There is no handwriting or other markings on the paper.

Part-D (General Knowledge)

20 Marks

1.	Fill in the blanks by choosing the correct answer: - (1x5= 5 Marks)	Space for answer
a)	A hen lives in a _____ (Kennel, Burrow, Coop, Tree)	
b)	Statue of Unity can be found in the state of _____ (Bihar, Gujarat, Goa, Haryana)	
c)	The largest desert in the world is _____ (Sahara, Thar, Kalahari, Arabia)	
d)	ICC Cricket world cup (men) 2023 won by _____ (India, England, Australia, Pakistan)	
e)	Indian national aquatic animal is _____ (Crocodile, Whale, Dolphin)	
2.	Identify and name the following pictures/Symbols (01x5=05 Marks)	Space for Answers
a)		
b)		
c)		

d)		
e)		
3.	Fill in the blanks with correct answers: - (1x5 = 5 Marks)	
a)	The shortcut key used to print a file is _____.	
b)	Spacebar key gives _____ blank space every time we press it.	
c)	The _____ bar displays the name of current document and application.	
d)	Scanner is an _____ device.	
e)	I am the boss and controls all the activities of a computer. _____	
4.	Current Affairs (Marks 1x5 =5)	
a)	Write down the name of the Chief guest of Republic Day 2024?	
b)	Which Indian Short Film won the best Documentary Award at Oscar 2023?	
c)	Who has been selected for Bharat Ratan award in 2024?	
d)	Which sports do Messi and Ronaldo play?	
e)	Which player/players was/were awarded with Major Dhyan Chand Khel Ratan Award 2023.	